
























Name: _____

School: _____

MUSIC CLASS BINGO RHYTHM BASICS

<p>Draw 1 repeat sign</p> 	<p>How many beats does this Rhythm get?</p> 	<p>Draw the time signature for the meter of 3</p> 	<p>Draw 8 eighth notes</p> 	<p>How many beats does this Rhythm get?</p> 
<p>How many beats does this Rhythm get?</p> 	<p>Draw a Whole Note rest</p> 	<p>Draw 1 Half Note and 1 Half Note rest</p> 	<p>How many beats does this Rhythm get?</p> 	<p>Draw the time signature for the meter of 4</p> 
<p>Draw 4 Quarter notes</p> 	<p>Draw 2 Quarter Notes and 4 Eighth Notes</p> 	<p>FREE SPACE</p>	<p>Draw 2 Half notes</p> 	<p>Draw a Half Note rest</p> 
<p>How many beats does this Rhythm get?</p> 	<p>Write the name of this music symbol</p> 	<p>Draw the double bar symbol that comes at the end of a song</p> 	<p>Write the name of this symbol.</p> 	<p>Draw 1 Half Note, 1 Quarter Note and 2 Eighth Notes.</p> 
<p>Draw 2 Half Note rests.</p> 	<p>Draw 2 Quarter notes and 1 half note.</p> 	<p>Draw 4 Quarter Note rests.</p> 	<p>Draw the time signature for the meter of 2</p> 	<p>How many beats does this Rhythm get?</p> 